

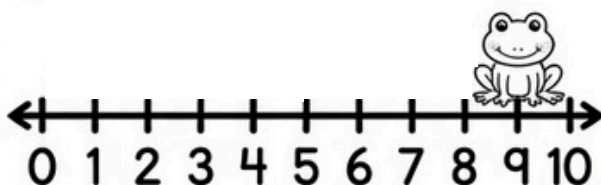
Grade 1 _____

Date _____

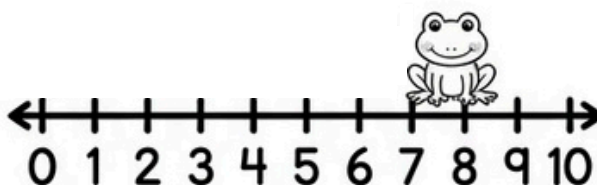
HOP BACK TO SOLVE

Use the number lines and the hopping frog to help you subtract. Count backward!

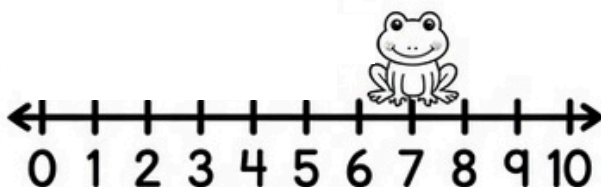
1. $9 - 4 = \underline{\quad}$




6. $8 - 3 = \underline{\quad}$




2. $7 - 2 = \underline{\quad}$



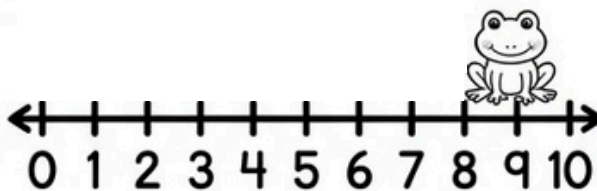
7. $4 - 2 = \underline{\quad}$



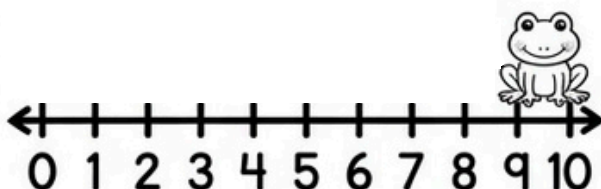
3. $5 - 3 = \underline{\quad}$



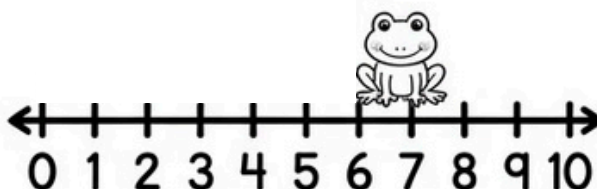
8. $9 - 6 = \underline{\quad}$



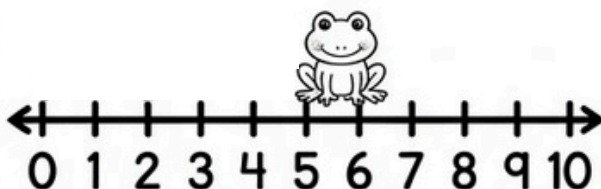
4. $10 - 5 = \underline{\quad}$



9. $7 - 5 = \underline{\quad}$



5. $6 - 1 = \underline{\quad}$



10. $10 - 8 = \underline{\quad}$

