

1



2

Name: _____

Date: _____



Count and Subtract

Count the pictures. Write the subtraction sentence.

-


1.



$$7 - 2 = \underline{\quad}$$



2.



$$8 - 3 = \underline{\quad}$$



3


3.



$$9 - 4 = \underline{\quad}$$



4.




$$10 - 6 = \underline{\quad}$$

5



o


5.



$$6 - 1 = \underline{\quad}$$



6.



$$9 - 5 = \underline{\quad}$$



-


7.



$$7 - 3 = \underline{\quad}$$



8.




$$8 - 2 = \underline{\quad}$$



4

9.



$$9 - 4 = \underline{\quad}$$

10.



$$10 - 7 = \underline{\quad}$$

6



7

