

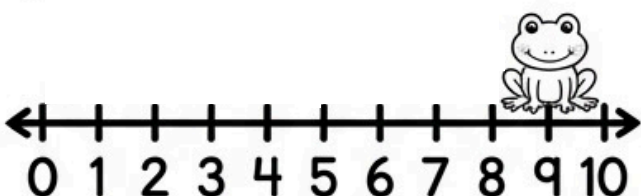
Grade 1 \_\_\_\_\_

Date \_\_\_\_\_

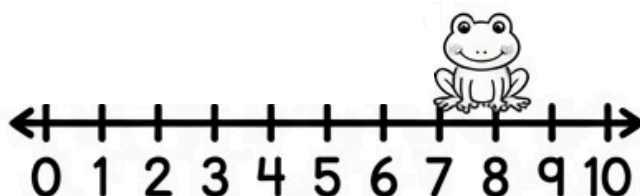
# HOP BACK TO SOLVE

Use the number lines and the hopping frog to help you subtract. Count backward!

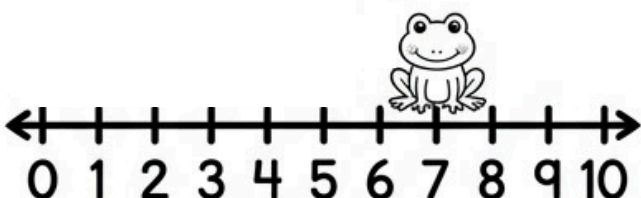
1.  $9 - 4 = \underline{\quad}$



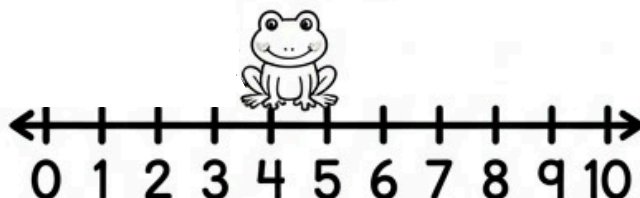
6.  $8 - 3 = \underline{\quad}$




2.  $7 - 2 = \underline{\quad}$



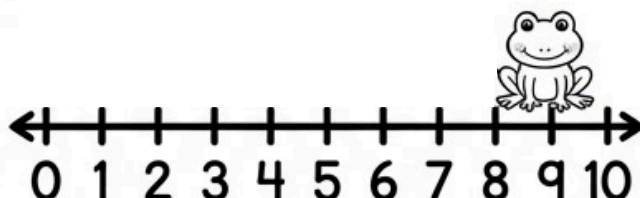
7.  $4 - 2 = \underline{\quad}$



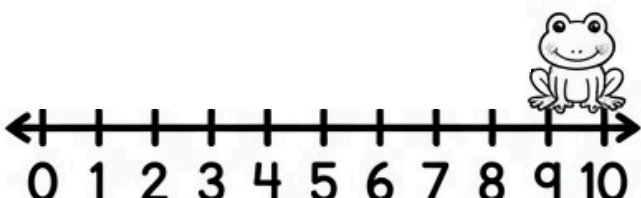
3.  $5 - 3 = \underline{\quad}$



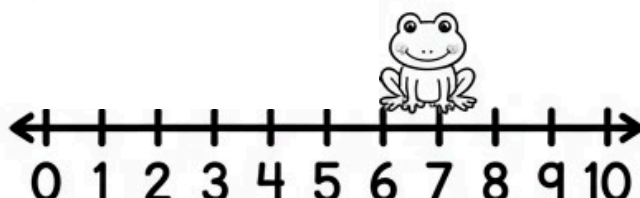
8.  $9 - 6 = \underline{\quad}$




4.  $10 - 5 = \underline{\quad}$



9.  $7 - 5 = \underline{\quad}$



5.  $6 - 1 = \underline{\quad}$



10.  $10 - 8 = \underline{\quad}$

