


Name: _____

Date: _____

Cross Out and Solve


Cross out the number of pictures. Then write the answer.

1.  $\square - 3 = \square$


2.  $\square - 2 = \square$


3.  $\square - 4 = \square$


4.  $\square - 1 = \square$


5.  $\square - 6 = \square$

6.  $\square - 2 = \square$

7.  $\square - 3 = \square$

8.  $\square - 5 = \square$

9.  $\square - 4 = \square$

10.  $\square - 2 = \square$