

1



2




Name: _____

Date: _____

Count and Subtract


Count the pictures. Write the subtraction sentence.

1.



$$7 - 2 = \underline{\quad}$$

2.




$$8 - 3 = \underline{\quad}$$

3.




$$9 - 4 = \underline{\quad}$$

4.




$$10 - 6 = \underline{\quad}$$

5.



$$6 - 1 = \underline{\quad}$$

6.




$$9 - 5 = \underline{\quad}$$

7.




$$7 - 3 = \underline{\quad}$$

8.



$$8 - 2 = \underline{\quad}$$

9.



$$9 - 4 = \underline{\quad}$$

10.



$$10 - 7 = \underline{\quad}$$



7

