

Name: \_\_\_\_\_


Date: \_\_\_\_\_

# Count, Cross Out & Subtract




Cross out 2 stars.

$$\square - 2 = \square$$



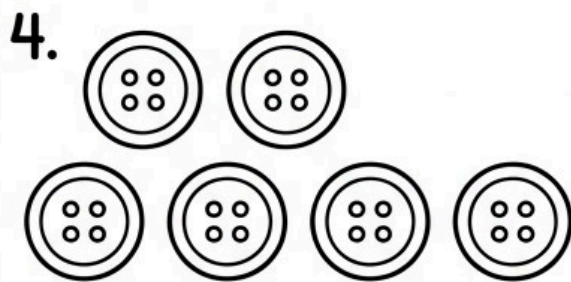
Cross out 4 apples.

$$\square - 4 = \square$$




Cross out 1 pencil.

$$\square - 1 = \square$$




Cross out 3 buttons.

$$\square - 3 = \square$$



Cross out 5 balloons.

$$\square - 5 = \square$$



Cross out 2 books.

$$\square - 2 = \square$$