


Subtraction Number Bonds

Look at the flower number bonds. Fill in the missing part or whole number. Then, write and solve the subtraction sentence.

Remember: Whole - Part = Part!




$$8 - 5 = \underline{\quad}$$




$$10 - \square = \underline{\quad}$$



$$6 - 4 = \underline{\quad}$$




$$9 - 6 = \underline{\quad}$$




$$7 - \square = \underline{\quad}$$



$$5 - 1 = \underline{\quad}$$



$$8 - \square = \underline{\quad}$$



$$6 - 3 = \underline{\quad}$$

Name: _____ Date: _____