

Name: _____ Date: _____

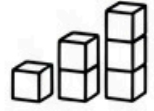


What Number Was Taken Away?



1. $9 - \square = 4$

7. $8 - \square = 3$



2. $7 - \square = 1$

8. $9 - \square = 5$

3. $5 - \square = 2$

10. $10 - \square = 6$

4. $7 - \square = 2$

11. $5 - \square = 2$

5. $6 - \square = 3$



12. $5 - \square = 2$

6. $8 - \square = 3$

13. $3 - \square = 6$

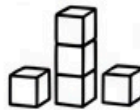
7. $8 - \square = 2$

14. $5 - \square = 3$

8. $10 - \square = 7$

16. $10 - \square = 5$

9. $7 - \square = 3$




17. $17 - \square = 5$

11. $8 - \square = 3$

19. $12 - \square = 3$

10. $5 - \square = 5$



20. $20 - \square = 7$

