





Count and Find the Missing Number


Name: _____


Date: _____


1. 
+ =
7 Apples
(Write 4 in box)



6. 

+ =
8 Apples



11. 
+ =
9 Apples



2. 
+ = 6
6 Ladybugs


7. 
+ = 5
5 Ladybugs



12. 
+ = 4
4 Ladybugs



3. 

+ = 9
9 Balloons

8. 

+ = 10
10 Balloons

13. 

+ = 12
12 Balloons




4. 
+ = 5
5 Fish

9. 

+ = 7
7 Fish

14. 

+ = 6
6 Fish

5. 

+ = 
10 Stars

10. 

+ = 
4 Stars

15. 

+ = 
11 Stars