

Name: _____







Date: _____



BUILD YOUR OWN NUMBER BONDS TO 10



Fill in the circles with numbers that add up to make 10.



CHALLENGE!

Can you think of as many different ways to make 10?
Write the number bonds below.

____ + ____ = 10 ____ + ____ = 10 ____ + ____ = 10

____ + ____ = 10 ____ + ____ = 10 ____ + ____ =



Great job! You're a number bond builder! 